




Number of coins in each bag: \_\_\_\_\_

Write equation \_\_\_\_\_



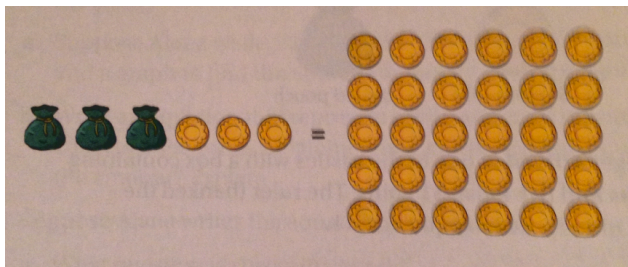
Number of coins in each bag: \_\_\_\_\_

Write equation \_\_\_\_\_



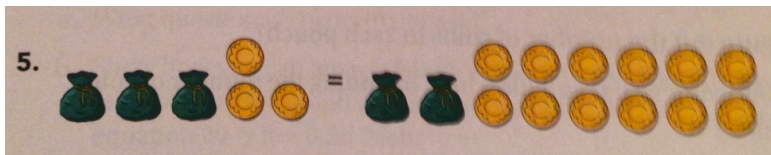
Number of coins in each bag: \_\_\_\_\_

Write equation \_\_\_\_\_




Number of coins in each bag: \_\_\_\_\_

Write equation \_\_\_\_\_




Number of coins in each bag: \_\_\_\_\_

Write equation \_\_\_\_\_



Number of coins in each bag: \_\_\_\_\_

Write equation \_\_\_\_\_



Number of coins in each bag: \_\_\_\_\_

Write equation \_\_\_\_\_



Number of coins in each bag: \_\_\_\_\_

Write equation \_\_\_\_\_



Write equation \_\_\_\_\_

Number of coins in each bag: \_\_\_\_\_